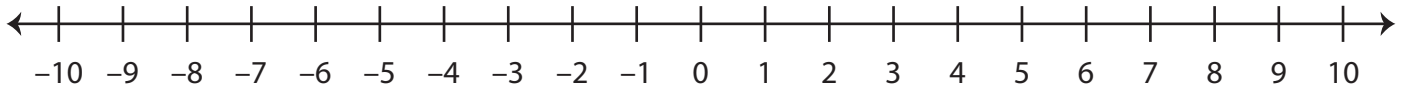


**Number Line - Integers**

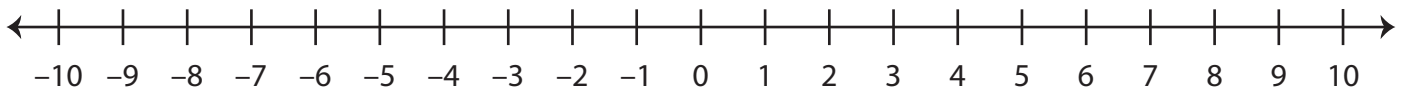
ES1

A) Mark the integers on the number line.

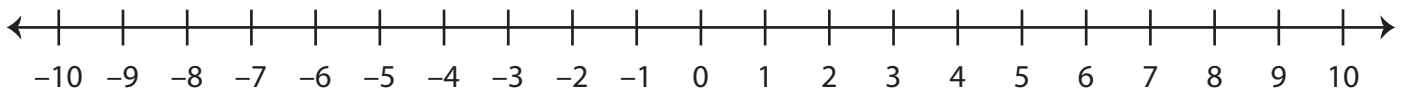
1) a) -2    b) 7    c) -5    d) 1



2) a) 9    b) -4    c) 3    d) -8



B) Answer the questions using the number line below.



1) 2 units to the left of 3 is \_\_\_\_\_

2) 6 units to the right of -1 is \_\_\_\_\_

3) 4 units to the left of -4 is \_\_\_\_\_

4) 3 units to the right of 7 is \_\_\_\_\_

5) 1 unit to the left of 10 is \_\_\_\_\_

6) 5 units to the right of -6 is \_\_\_\_\_

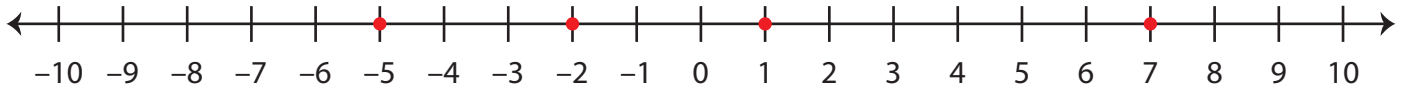
7) 8 units to the left of 5 is \_\_\_\_\_

**Answer key****Number Line - Integers**

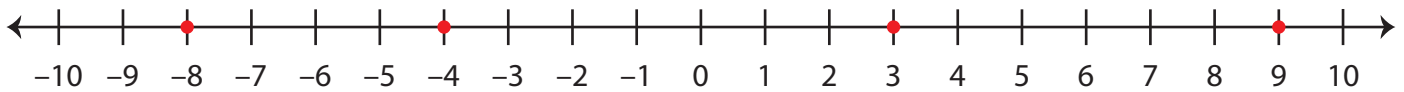
ES1

A) Mark the integers on the number line.

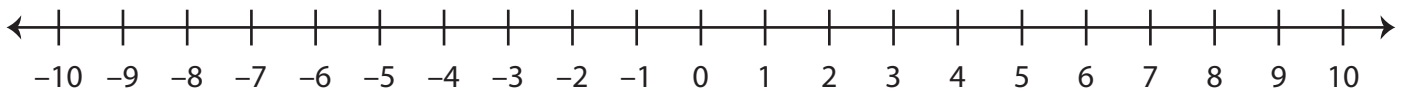
1) a) -2    b) 7    c) -5    d) 1



2) a) 9    b) -4    c) 3    d) -8



B) Answer the questions using the number line below.

1) 2 units to the left of 3 is     1    2) 6 units to the right of -1 is     5    3) 4 units to the left of -4 is    -8   4) 3 units to the right of 7 is    10   5) 1 unit to the left of 10 is     9    6) 5 units to the right of -6 is    -1   7) 8 units to the left of 5 is    -3