

Name : _____

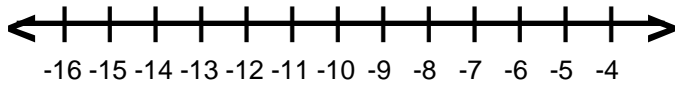
Score : _____

Teacher : _____

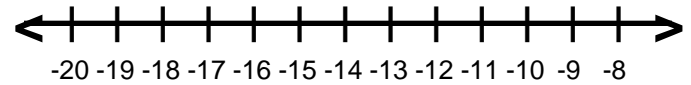
Date : _____

Solve and Graph the Inequalities

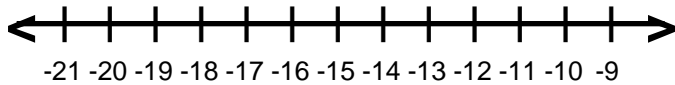
1) $-8 + b \leq -17$



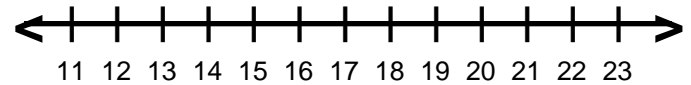
6) $-16 \geq j + 1$



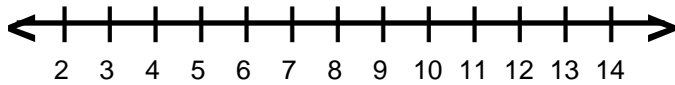
2) $-11 > 7 + c$



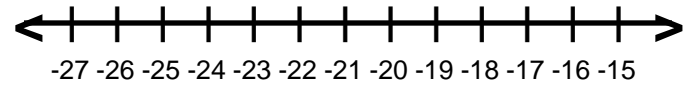
7) $5 \leq -8 + d$



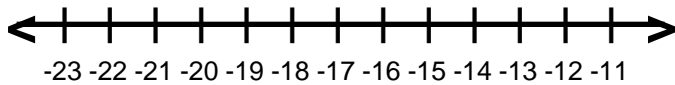
3) $-3 + p > 8$



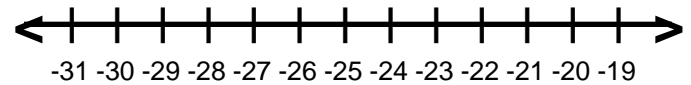
8) $-17 \geq 5 + r$



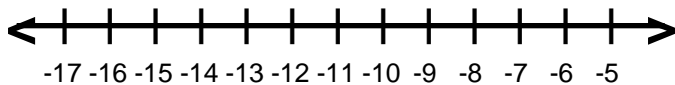
4) $-11 \geq s + 3$



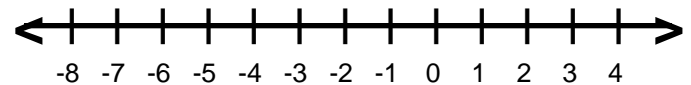
9) $6 + w \leq -19$



5) $f - 4 < -13$



10) $7 < 6 + y$



Name : _____

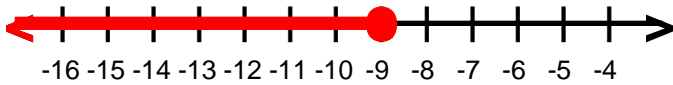
Score : _____

Teacher : _____

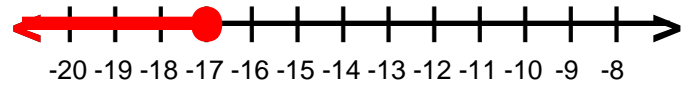
Date : _____

Solve and Graph the Inequalities

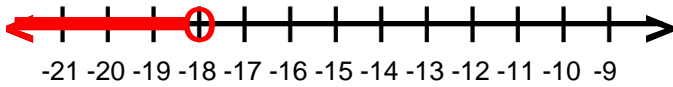
1) $b \leq -9$



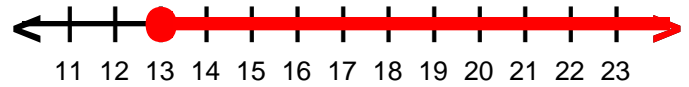
6) $j \leq -17$



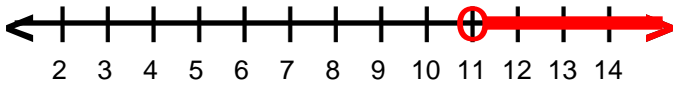
2) $c < -18$



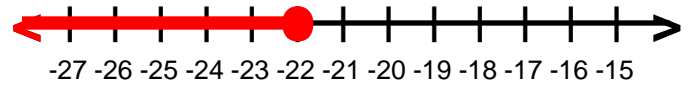
7) $d \geq 13$



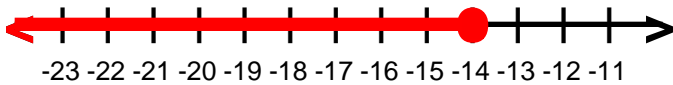
3) $p > 11$



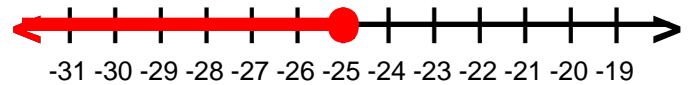
8) $r \leq -22$



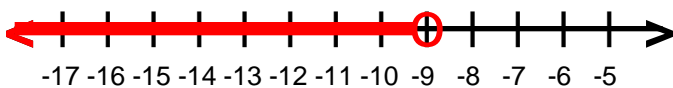
4) $s \leq -14$



9) $w \leq -25$



5) $f < -9$



10) $y > 1$

