

Name : _____

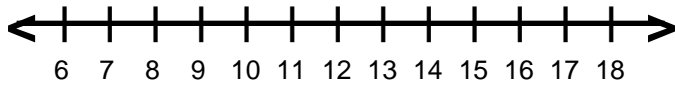
Score : _____

Teacher : _____

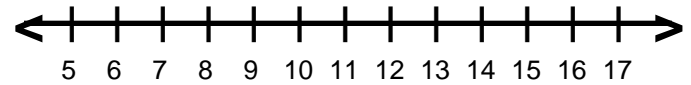
Date : _____

Solve and Graph the Inequalities

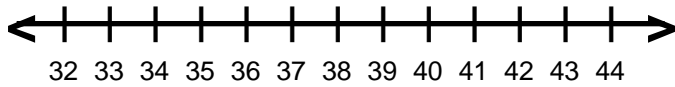
1) $-2n \leq -20$



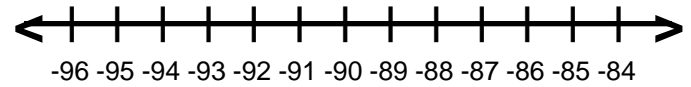
6) $5k < 60$



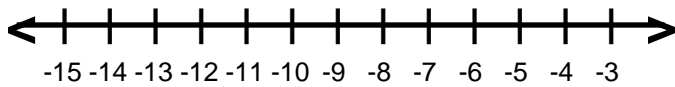
2) $\frac{g}{7} \geq 6$



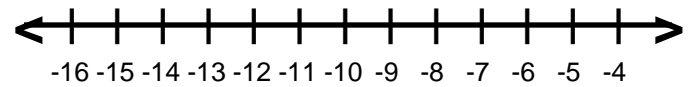
7) $\frac{g}{7} > -13$



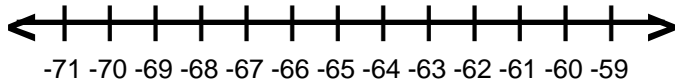
3) $-40 > 4r$



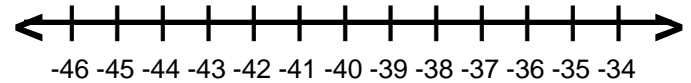
8) $30 \geq -5f$



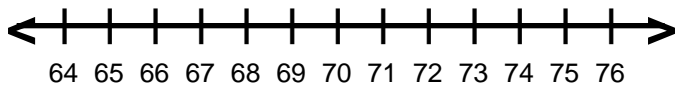
4) $-9 < \frac{p}{7}$



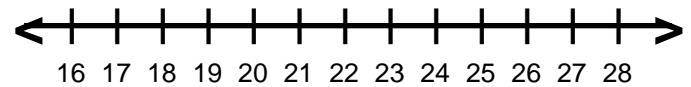
9) $\frac{s}{6} \leq -7$



5) $10 > \frac{z}{7}$



10) $6 \leq \frac{c}{4}$



Name : _____

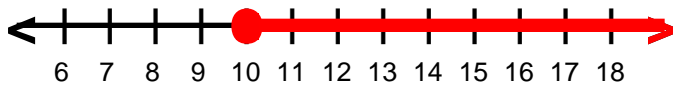
Score : _____

Teacher : _____

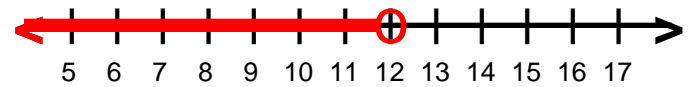
Date : _____

Solve and Graph the Inequalities

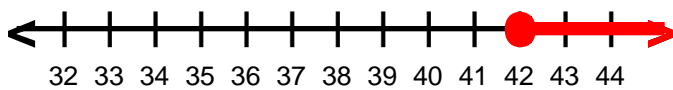
1) $n \geq 10$



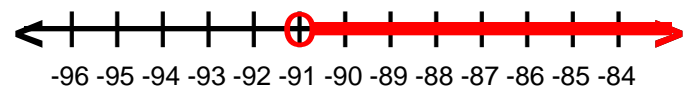
6) $k < 12$



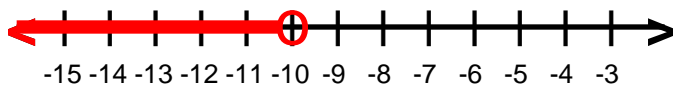
2) $g \geq 42$



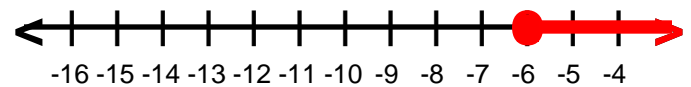
7) $q > -91$



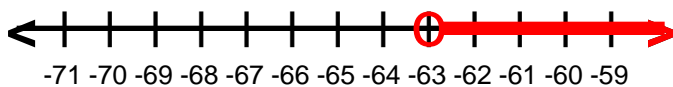
3) $r < -10$



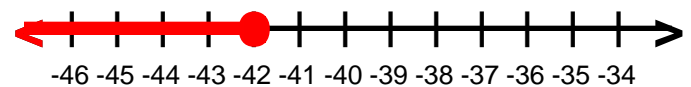
8) $f \geq -6$



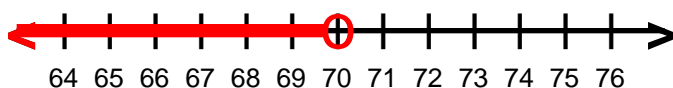
4) $p > -63$



9) $s \leq -42$



5) $z < 70$



10) $c \geq 24$

