

Name : _____

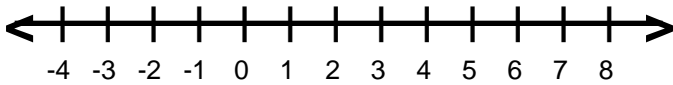
Score : _____

Teacher : _____

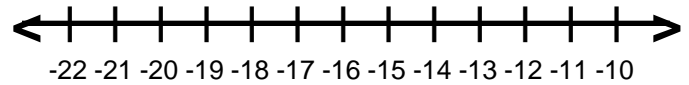
Date : _____

Solve and Graph the Inequalities

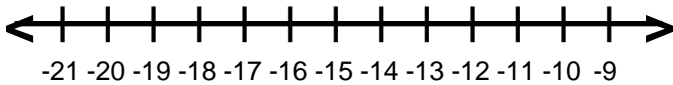
1) $6 < 8 + g$



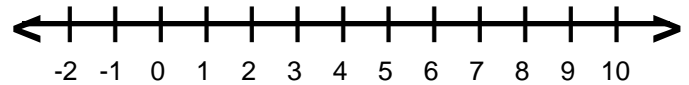
6) $-17 \geq w + 1$



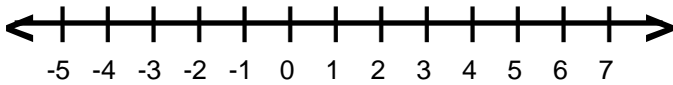
2) $j + 3 \leq -10$



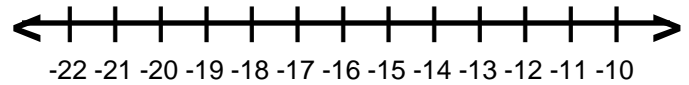
7) $9 < 1 + s$



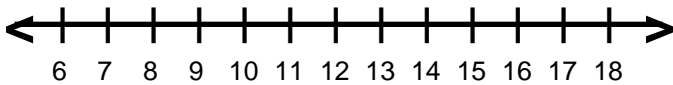
3) $r + 1 > 6$



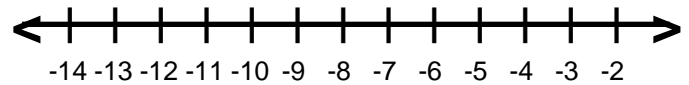
8) $-15 > n + 3$



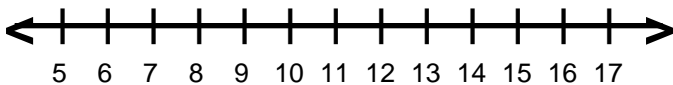
4) $10 \leq -5 + a$



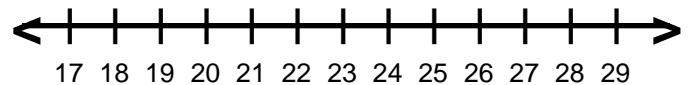
9) $-2 + h \leq -6$



5) $15 < y + 1$



10) $-7 + d \geq 18$



Name : _____

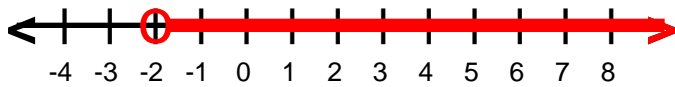
Score : _____

Teacher : _____

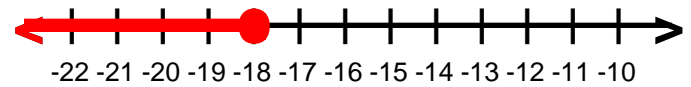
Date : _____

Solve and Graph the Inequalities

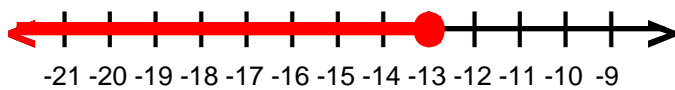
1) $g > -2$



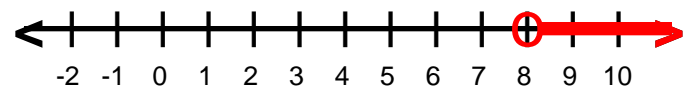
6) $w \leq -18$



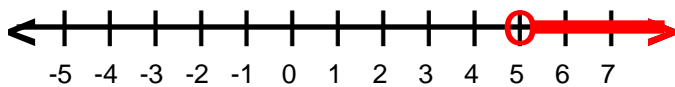
2) $j \leq -13$



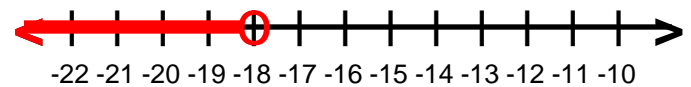
7) $s > 8$



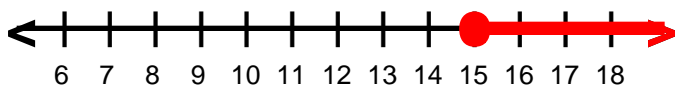
3) $r > 5$



8) $n < -18$



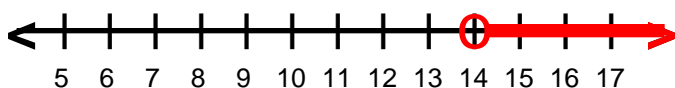
4) $a \geq 15$



9) $h \leq -4$



5) $y > 14$



10) $d \geq 25$

